

CIRCLE (Q 1, PAPER 2)

2009

1 (a) Show that, for all values of $t \in \mathbf{R}$, the point $\left(\frac{2t}{1+t^2}, \frac{1-t^2}{1+t^2}\right)$ lies on the circle

$$x^2 + y^2 = 1.$$

(b) (i) Find the equation of the tangent to the circle $x^2 + y^2 = 10$ at the point (3, 1).

(ii) Find the values of $k \in \mathbf{R}$ for which the line $x - y + k = 0$ is a tangent to the

$$\text{circle } (x-3)^2 + (y+4)^2 = 50.$$

(c) Two circles intersect at $p(2, 0)$ and $q(-2, 8)$. The distance from the centre of each circle to the common chord $[pq]$ is $\sqrt{20}$.

Find the equations of the two circles.

SOLUTION

1 (a)

Substitute the point into the equation of the circle:

$$\begin{aligned} x^2 + y^2 &= \left(\frac{2t}{1+t^2}\right)^2 + \left(\frac{1-t^2}{1+t^2}\right)^2 = \frac{4t^2}{(1+t^2)^2} + \frac{(1-t^2)^2}{(1+t^2)^2} \\ &= \frac{4t^2 + (1-t^2)^2}{(1+t^2)^2} = \frac{4t^2 + 1 - 2t^2 + t^4}{(1+t^2)^2} \\ &= \frac{1 + 2t^2 + t^4}{(1+t^2)^2} = \frac{(1+t^2)^2}{(1+t^2)^2} = 1 \end{aligned}$$

1 (b) (i)

Circle: $x^2 + y^2 = 10$: Centre (0, 0), $r = \sqrt{10}$

Slope between centre and point of contact: $m = \frac{1}{3}$

Perpendicular slope of tangent t : $m = -3$

Equation of t : Point (3, 1), $m = -3$

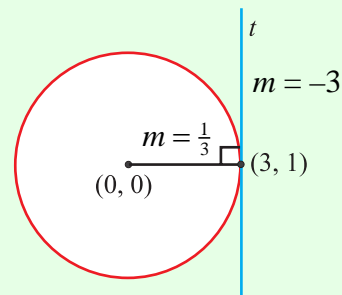
$$t: 3x + y + k = 0$$

$$(3, 1) \in t \Rightarrow 3(3) + (1) + k = 0$$

$$9 + 1 + k = 0$$

$$k = -10$$

$$t: 3x + y - 10 = 0$$

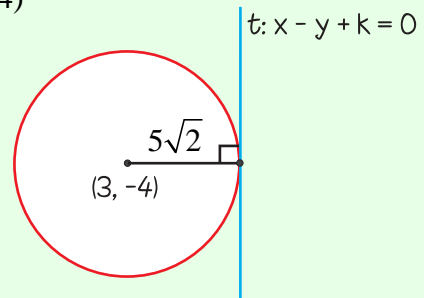


1 (b) (ii)

Circle: $(x-3)^2 + (y+4)^2 = 50$: $r = \sqrt{50} = 5\sqrt{2}$, centre $(3, -4)$

Perpendicular distance of centre to tangent t is equal to the radius.

$$d = \frac{|ax_1 + by_1 + c|}{\sqrt{a^2 + b^2}}$$



$$5\sqrt{2} = \frac{|(3) - (-4) + k|}{\sqrt{1^2 + (-1)^2}}$$

$$5\sqrt{2} = \frac{|3 + 4 + k|}{\sqrt{2}}$$

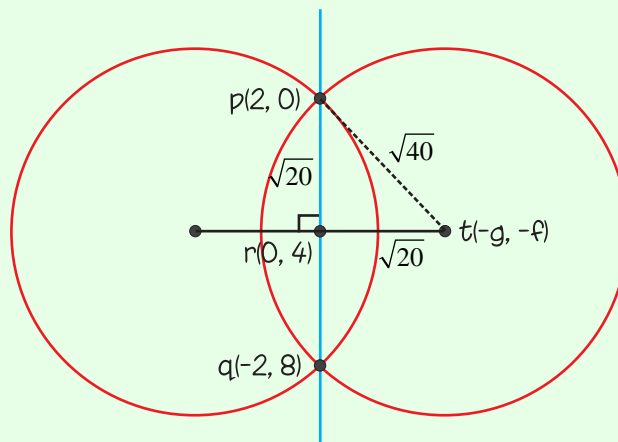
$$10 = |7 + k|$$

$$\pm 10 = 7 + k$$

$$7 + k = 10 \quad | \quad 7 + k = -10$$

$$k = 3 \quad | \quad k = -17$$

1 (c)



Common chord is perpendicular to line joining the centres.

Call r the midpoint of pq . Midpoint of pq : $r(0, 4)$

Call t the centre of the circle: $t(-g, -f)$

$$\text{Slope of } pr = \frac{0-4}{2-0} = \frac{-4}{2} = -2$$

Perpendicular slope of $rt = \frac{1}{2}$

Slope of rt :

$$\frac{-f-4}{-g-0} = \frac{1}{2} \Rightarrow \frac{f+4}{g} = \frac{1}{2}$$

$$2f + 8 = g \dots (1)$$

$$|rt| = \sqrt{20}$$

$$|pr| = \sqrt{(2-0)^2 + (0-4)^2} = \sqrt{4+16} = \sqrt{20}$$

$$\begin{aligned} |pt|^2 &= |pr|^2 + |rt|^2 \\ &= 20 + 20 = 40 \end{aligned}$$

$$\therefore |pt| = \sqrt{40}$$

$$\text{Distance } pt: \sqrt{(-g-0)^2 + (-f-4)^2} = \sqrt{20}$$

$$(-g-0)^2 + (-f-4)^2 = 20$$

$$g^2 + f^2 + 8f + 16 = 20$$

$$g^2 + f^2 + 8f = 4 \dots (2)$$

Replace g in Eqn. (2) by its value from Eqn. (1):

$$(2f+8)^2 + f^2 + 8f = 4$$

$$4f^2 + 32f + 64 + f^2 + 8f - 4 = 0$$

$$5f^2 + 40f + 60 = 0$$

$$f^2 + 8f + 12 = 0$$

$$(f+6)(f+2) = 0$$

$$f = -6, -2$$

$$f = -6: g = 2(-6) + 8 = -4 \Rightarrow (-g, -f) = (4, 6) \text{ is a centre.}$$

$$f = -2: g = 2(-2) + 8 = 4 \Rightarrow (-g, -f) = (-4, 2) \text{ is a centre.}$$

Circle 1: Centre (4, 6), $r = \sqrt{40}$

Equation of circle 1:

$$(x-4)^2 + (y-6)^2 = 40$$

$$x^2 - 8x + 16 + y^2 - 12y + 36 = 40$$

$$x^2 + y^2 - 8x - 12y + 12 = 0$$

Circle 2: Centre (-4, 2), $r = \sqrt{40}$

Equation of circle 2:

$$(x+4)^2 + (y-2)^2 = 40$$

$$x^2 + 8x + 16 + y^2 - 4y + 4 = 40$$

$$x^2 + y^2 + 8x - 4y - 20 = 0$$